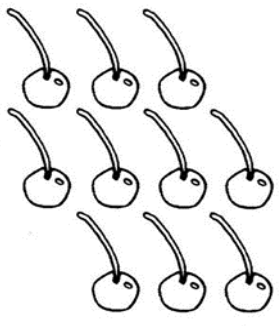

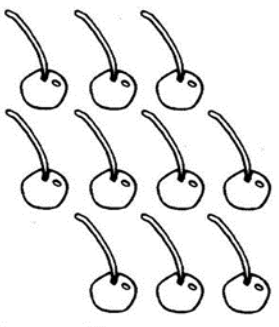

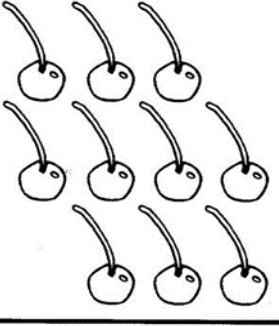

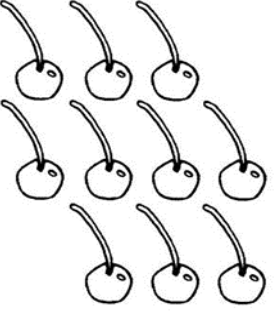










Zadanie 1.

Policz, ile jest ciastek w ramce.
Pokoloruj tyle wisierek, ile widzisz ciastek.

Zadanie 2.

Policz, ile jest krasnali w ramce, a następnie pokoloruj tyle grzybków, ile jest krasnali.



Zadanie 3.

Oblicz. Wyniki odszukaj na skrzydłach motyla i pokoloruj odpowiednio pola.

na fioletowo:

$$3+5+2=\dots\dots$$

$$14-4+2=\dots\dots$$

$$20-17+4=\dots\dots$$

na różowo:

$$6+6+4=\dots\dots$$

$$15-5+9=\dots\dots$$

$$10-8+3=\dots\dots$$



na niebiesko:

$$8+2+8=\dots\dots$$

$$13-3-8=\dots\dots$$

$$11-1+7=\dots\dots$$

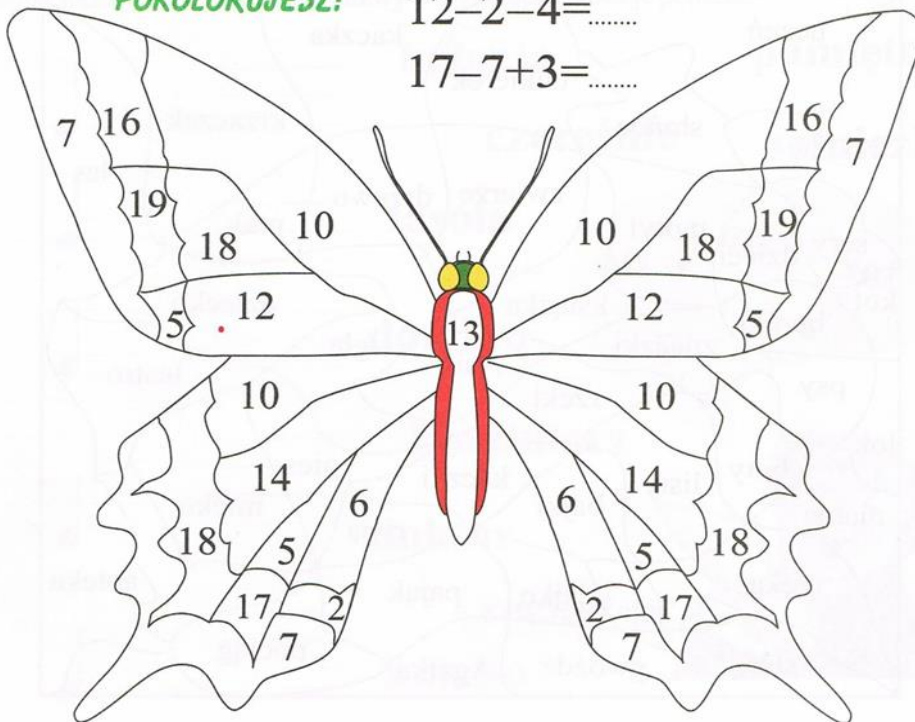
**NIE BĘDĘ
TAKI SMUTNY,
GDY MNIE
POKOLORUJESZ!**

na żółto:

$$8+2+4=\dots\dots$$

$$12-2-4=\dots\dots$$

$$17-7+3=\dots\dots$$



Zadanie 4.

KARTA PRACY NR 30

Utrwalenie wiadomości

1 Wstaw brakującą liczbę.

$$\text{☀} + 7 = 15$$

$$\text{☀} + 9 = 11$$

$$11 + \text{☀} = 18$$

$$16 + \text{☀} = 20$$

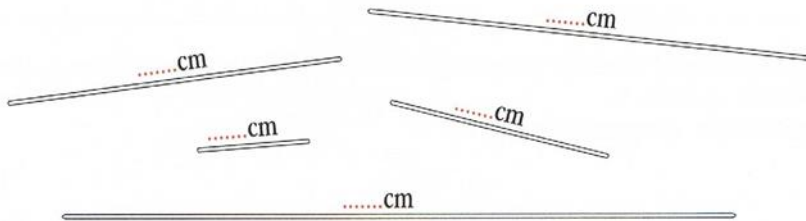
$$\text{☀} - 8 = 4$$

$$\text{☀} - 10 = 3$$

$$20 - \text{☀} = 13$$

$$20 - \text{☀} = 1$$

2 Zmierz i zapisz długość każdego patyczka.



Pokoloruj najkrótszy i najdłuższy patyczek.

3 Zastąp dodawanie mnożeniem i oblicz działania.

$4 + 4 + 4 + 4 =$	$=$
$7 + 7 =$	
$2 + 2 + 2 + 2 + 2 =$	
$0 + 0 + 0 =$	
$10 + 10 =$	